



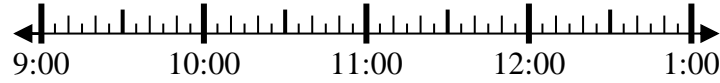
Solve each problem.

Answers

1) Start: 9:35

Elapsed: 2 hrs & 30 mins

End: _____

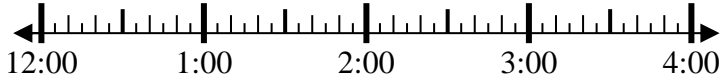


1. _____

2) Start: 12:50

Elapsed: 1 hr & 45 mins

End: _____

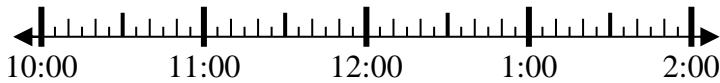


2. _____

3) Start: 10:15

Elapsed: 1 hr & 25 mins

End: _____

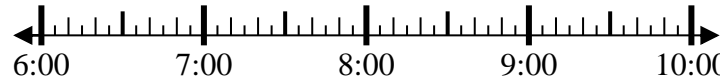


3. _____

4) Start: 6:25

Elapsed: 1 hr & 45 mins

End: _____

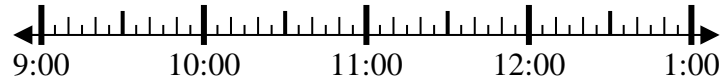


4. _____

5) Start: 9:10

Elapsed: 1 hr & 15 mins

End: _____

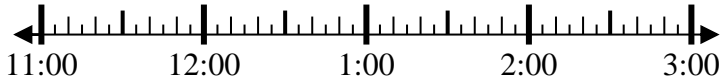


5. _____

6) Start: 11:45

Elapsed: 2 hrs & 15 mins

End: _____

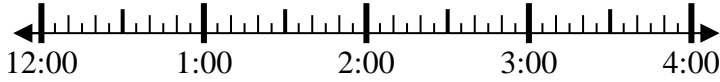


6. _____

7) Start: 12:20

Elapsed: 1 hr & 40 mins

End: _____

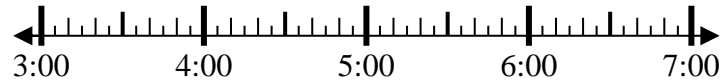


7. _____

8) Start: 3:35

Elapsed: 1 hr & 40 mins

End: _____



8. _____



Solve each problem.

1) Start: 9:35

Elapsed: 2 hrs & 30 mins

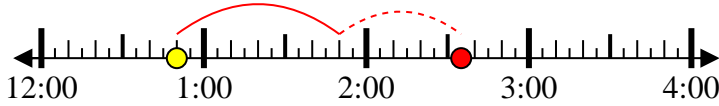
End: 12:05



2) Start: 12:50

Elapsed: 1 hr & 45 mins

End: 2:35



3) Start: 10:15

Elapsed: 1 hr & 25 mins

End: 11:40



4) Start: 6:25

Elapsed: 1 hr & 45 mins

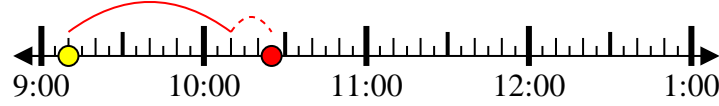
End: 8:10



5) Start: 9:10

Elapsed: 1 hr & 15 mins

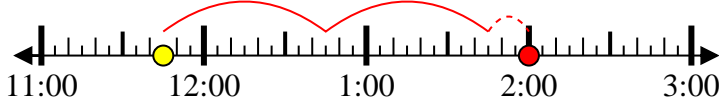
End: 10:25



6) Start: 11:45

Elapsed: 2 hrs & 15 mins

End: 2:00



7) Start: 12:20

Elapsed: 1 hr & 40 mins

End: 2:00



8) Start: 3:35

Elapsed: 1 hr & 40 mins

End: 5:15



Answers

1. 12:05

2. 2:35

3. 11:40

4. 8:10

5. 10:25

6. 2:00

7. 2:00

8. 5:15